





Name \_\_\_\_\_

**NAME:** \_\_\_\_\_

### Picture Graphs - Step-by-Step Lesson

Color	Balls
RED	
BLUE	
GREEN	
ORANGE	

Look at the pictograph and answer the following question.

If the cost of one ball is \$5, how much is the cost of all the balls? \_\_\_\_\_

**Explanation:**

Start by counting all the balls. There are total 13 balls.

The total cost of all the balls = total number of balls x price of balls

$$13 \times 5 = 65\$.$$

Answer: \$65.

QUALIFICATION:   