
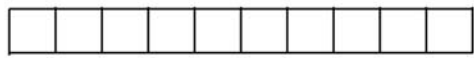


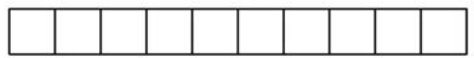
Name _____


Help Kitty make 10





 $\textcircled{4} + \textcircled{6} = 10$

 $\textcirc{} + \textcirc{} = 10$

 $\textcirc{} + \textcirc{} = 10$

 $\textcirc{} + \textcirc{} = 10$

 $\textcirc{} + \textcirc{} = 10$

 $\textcirc{} + \textcirc{} = 10$