

NAME: -----

MEASURING IN INCHES

Directions: Using the ruler, measure the following crayons and circle the longest crayon.



.....4 inches



.....3 inches




..... $5\frac{1}{2}$ inches




red

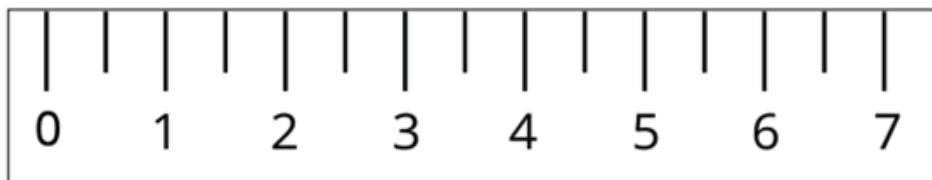
..... $2\frac{1}{2}$ inches



.....5 inches



..... $1\frac{1}{2}$ inches



How Did You Do? 😊 😐 ☹️