






NAME: _____

LET'S MAKE 10







Draw butterflies to make ten. Finish the number model.






$$2 + \underline{8} = 10$$



$$4 + \underline{6} = 10$$

$$6 + \underline{4} = 10$$

$$5 + \underline{5} = 10$$

$$2 + \underline{8} = 10$$

How Did You Do? 😊 😐 ☹️