

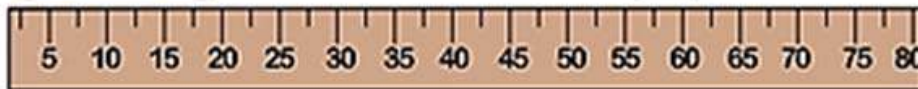
NAME: _____

MEASURING LENGTH

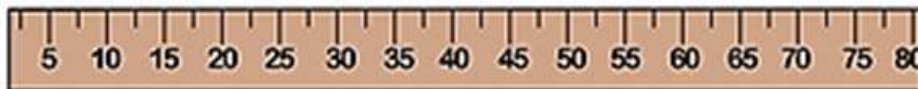
Fill in the blank with the correct measurement.



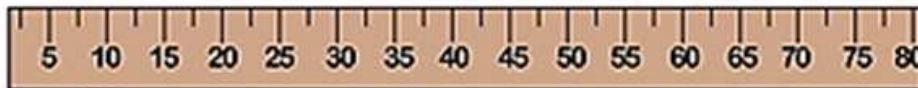
20 centimeters



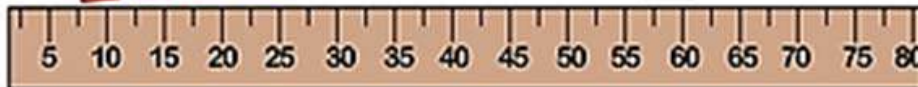
40 centimeters



35 centimeters



45 centimeters



QUALIFICATION: 😊 😐 😞

Answer Key