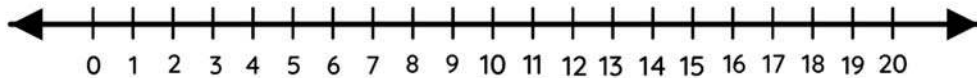


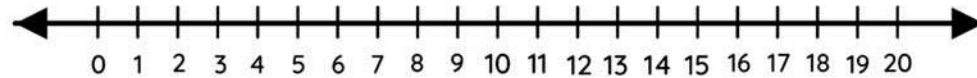
Name _____

Number line addition

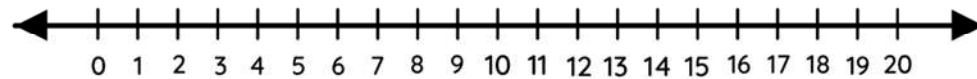
Solve the addition using number lines.



$$6+13=$$



$$3+14=$$



$$5+15=$$