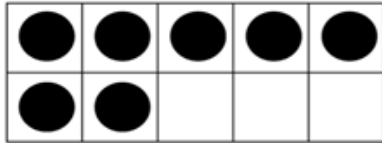


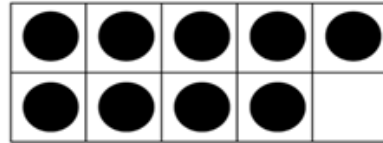
NAME: _____

FIND THE NUMBER

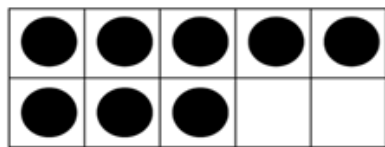
Making 10



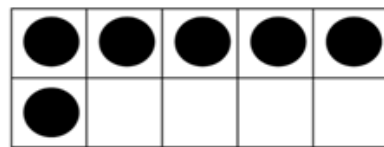
$$7 + \boxed{3} = 10$$



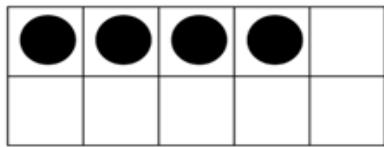
$$9 + \boxed{1} = 10$$



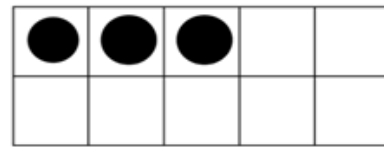
$$8 + \boxed{2} = 10$$



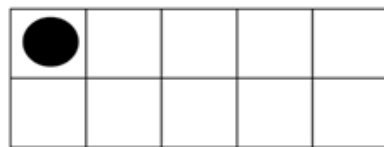
$$6 + \boxed{4} = 10$$



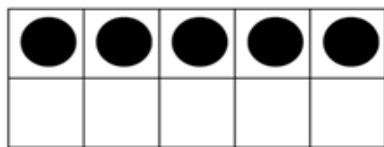
$$4 + \boxed{6} = 10$$



$$3 + \boxed{7} = 10$$



$$1 + \boxed{9} = 10$$



$$5 + \boxed{5} = 10$$

How Did You Do? 😊 😐 ☹️