

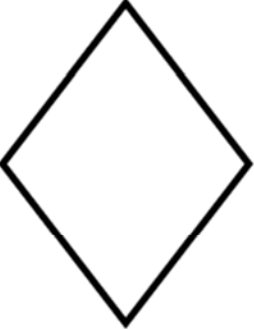
# Answer Key

NAME: \_\_\_\_\_

## HOW MANY SIDES?

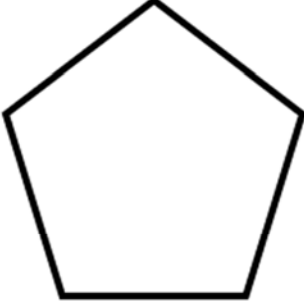
Count the sides of each shape and circle the correct number.

diamond



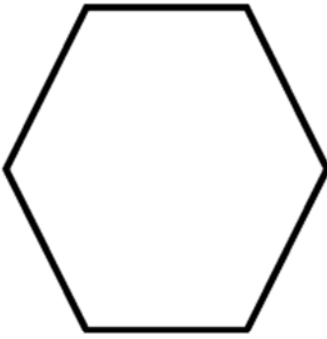
2	5	4
---	---	---

pentagon



6	5	4
---	---	---

hexagon



9	8	6
---	---	---

star



8	10	6
---	----	---

How Did You Do? 😊 😐 ☹️