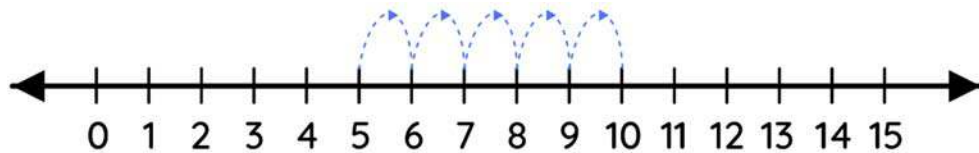


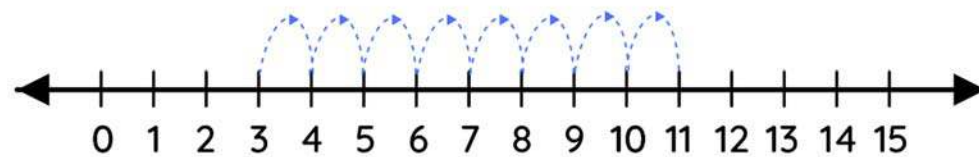
Name \_\_\_\_\_

## Number line addition

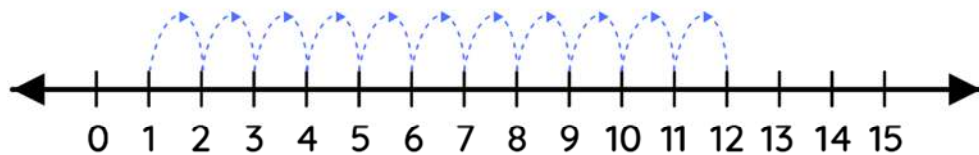
Observe the following number lines, write the missing numbers in the space.



$$\boxed{5} + \boxed{5} = \boxed{10}$$



$$\boxed{3} + \boxed{8} = \boxed{11}$$



$$\boxed{1} + \boxed{11} = \boxed{12}$$