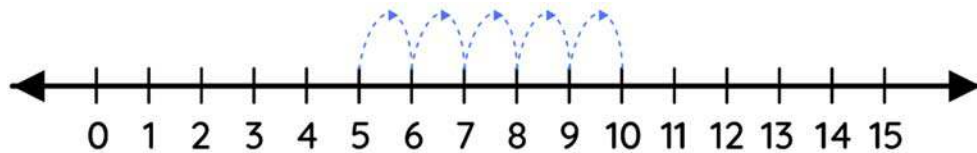


Name \_\_\_\_\_

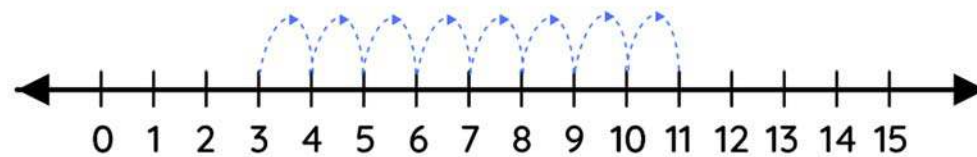
## Number line addition

Observe the following number lines, write the missing numbers in the space.



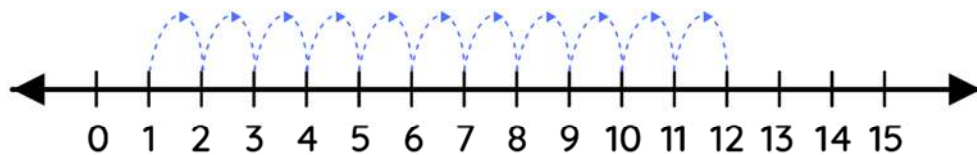
$$\square + \square = \square$$

---



$$\square + \square = \square$$

---



$$\square + \square = \square$$