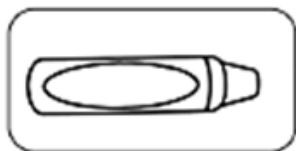
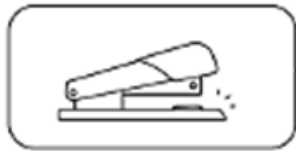
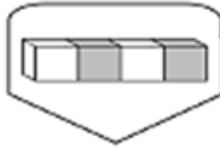


NAME: \_\_\_\_\_

## LET'S MEASURE

Directions: Measure the object using cubes and dimes.  
Record your answers below.

CAN YOU  
MEASURE A....



How Did You Do? 😊 😐 ☹️