


NAME: _____



square

Fill in the correct number below.

A square has 4 sides.

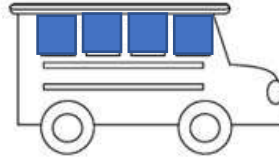
A square has 4 corners.

A square has equal sizes.




Let's trace the square!

Find the squares and color them.
How many squares do you see?
Write the number below.



_____ squares

Squares are hiding in the images. Find and color the squares!



QUALIFICATION:



Answer Key