

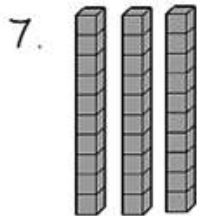
NAME: _____

BASE TEN BLOCKS WORKSHEETS

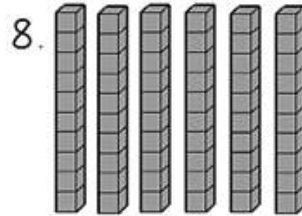
Directions: Write to tell how many tens.

1. 20 is 2 tens.
2. 40 is 4 tens.
3. 70 is 7 tens.
4. 50 is 5 tens.
5. 30 is 3 tens.
6. 60 is 6 tens.

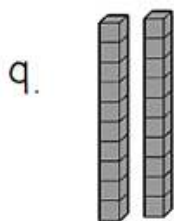
Directions: Write the number the blocks show.



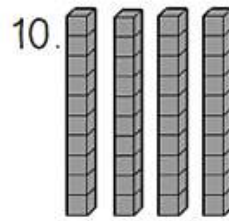
30



60



20



40

How Did You Do? 