

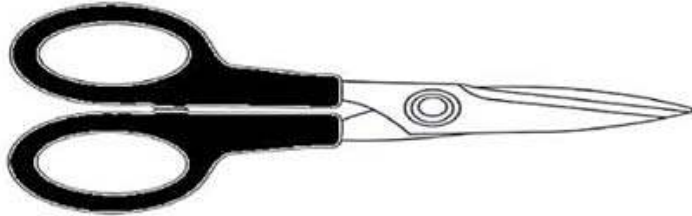
NAME: _____

MEASURING WITH A RULER

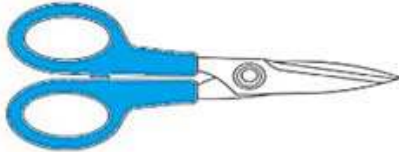
Using the ruler, measure the following pairs of scissors and circle the longest one.



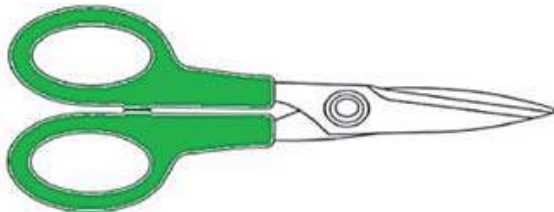
___ inches



___ inches

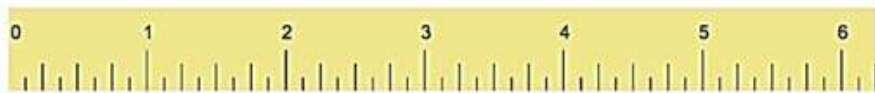


___ inches



___ inches

----- Cut along this line -----



QUALIFICATION:

