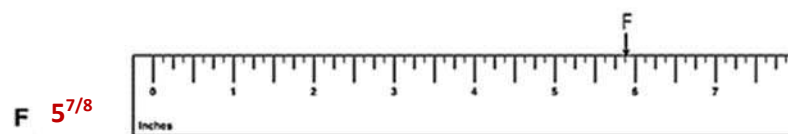
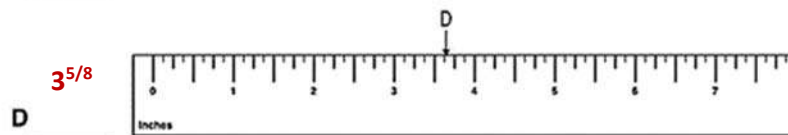
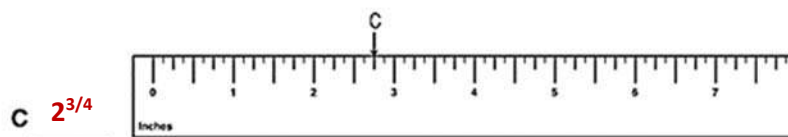


NAME: _____

READING A RULER

Determine the measurement from zero to the marked point on each ruler to the nearest $\frac{1}{8}$. Be sure to put your answers in lowest terms.



QUALIFICATION: 😊 😐 😞

Answer Key