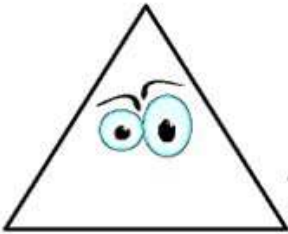
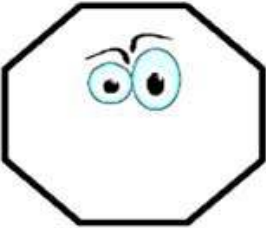





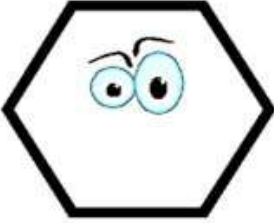


# Answer Key

NAME: \_\_\_\_\_

## COUNTING CORNERS AND SIDES

	<p>Triangle</p> <p>Sides <u>3</u></p> <p>Corners <u>3</u></p>		<p>Octagon</p> <p>Sides <u>8</u></p> <p>Corners <u>8</u></p>
	<p>Square</p> <p>Sides <u>4</u></p> <p>Corners <u>4</u></p>		<p>Rhombus</p> <p>Sides <u>4</u></p> <p>Corners <u>4</u></p>
	<p>Rectangle</p> <p>Sides <u>4</u></p> <p>Corners <u>4</u></p>		<p>Pentagon</p> <p>Sides <u>5</u></p> <p>Corners <u>5</u></p>
	<p>Trapezoid</p> <p>Sides <u>4</u></p> <p>Corners <u>4</u></p>		<p>Hexagon</p> <p>Sides <u>6</u></p> <p>Corners <u>6</u></p>

How Did You Do? 😊 😐 😞